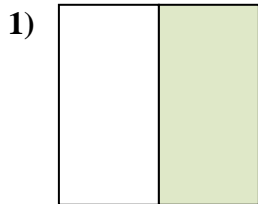


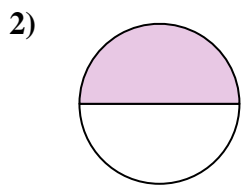


Determine which letter best describes the shaded portion.

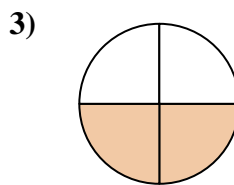
Answers




- A. two halves
- B. one half
- C. one-fourth



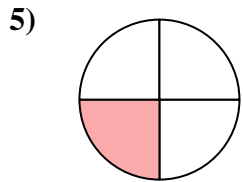
- A. one half
- B. three-fourths
- C. four quarters



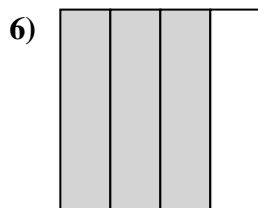
- A. one quarter
- B. two halves
- C. two-fourths



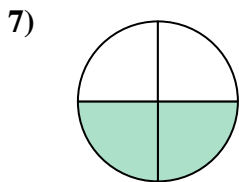
- A. four-fourths
- B. two halves
- C. two-fourths



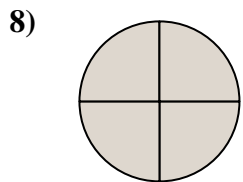
- A. three-fourths
- B. one quarter
- C. one half



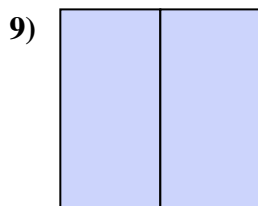
- A. three quarters
- B. two halves
- C. four-fourths



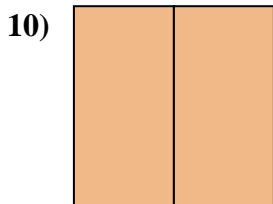
- A. one-fourth
- B. two halves
- C. two quarters



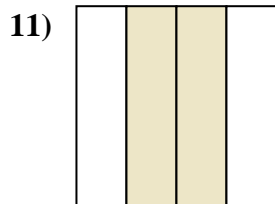
- A. four quarters
- B. three quarters
- C. one half



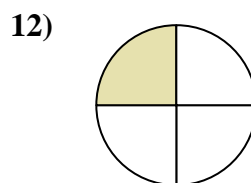
- A. three-fourths
- B. one quarter
- C. two halves



- A. one-fourth
- B. three-fourths
- C. two halves



- A. two halves
- B. two quarters
- C. three quarters



- A. two-fourths
- B. one quarter
- C. one half

1. _____

2. _____

3. _____

4. _____

5. _____

6. _____

7. _____

8. _____

9. _____

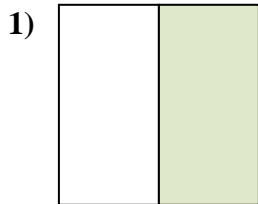
10. _____

11. _____

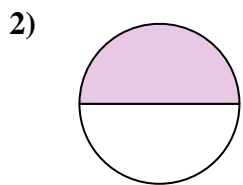
12. _____



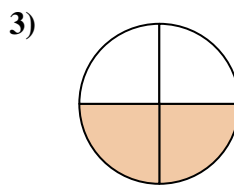
Determine which letter best describes the shaded portion.




- A. two halves
- B. one half
- C. one-fourth



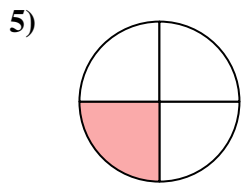
- A. one half
- B. three-fourths
- C. four quarters



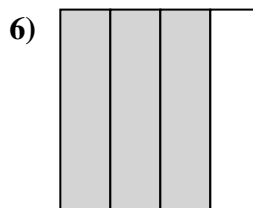
- A. one quarter
- B. two halves
- C. two-fourths



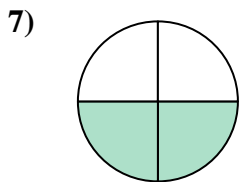
- A. four-fourths
- B. two halves
- C. two-fourths



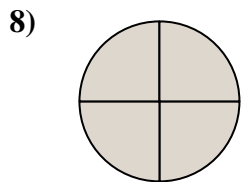
- A. three-fourths
- B. one quarter
- C. one half



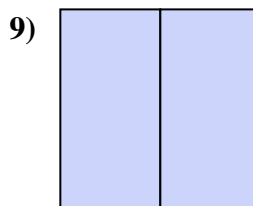
- A. three quarters
- B. two halves
- C. four-fourths



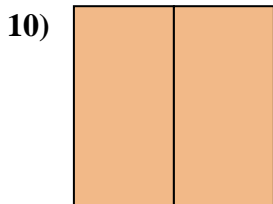
- A. one-fourth
- B. two halves
- C. two quarters



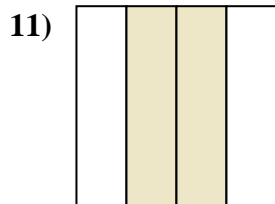
- A. four quarters
- B. three quarters
- C. one half



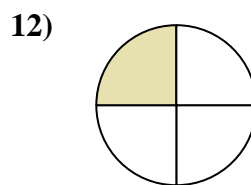
- A. three-fourths
- B. one quarter
- C. two halves



- A. one-fourth
- B. three-fourths
- C. two halves



- A. two halves
- B. two quarters
- C. three quarters



- A. two-fourths
- B. one quarter
- C. one half

Answers

1. **B**

2. **A**

3. **C**

4. **C**

5. **B**

6. **A**

7. **C**

8. **A**

9. **C**

10. **C**

11. **B**

12. **B**